


Shade the fractions on the grid and show them as hundredths and decimals:

a


$$\frac{1}{2}$$



$$= \frac{\boxed{}}{100} = \boxed{0.}$$

b


$$\frac{1}{4}$$



$$= \frac{\boxed{}}{100} = \boxed{0.}$$

c


$$\frac{1}{5}$$



$$= \frac{\boxed{}}{100} = \boxed{0.}$$

d

$$\frac{1}{10}$$



$$= \frac{\boxed{}}{100} = \boxed{0.}$$