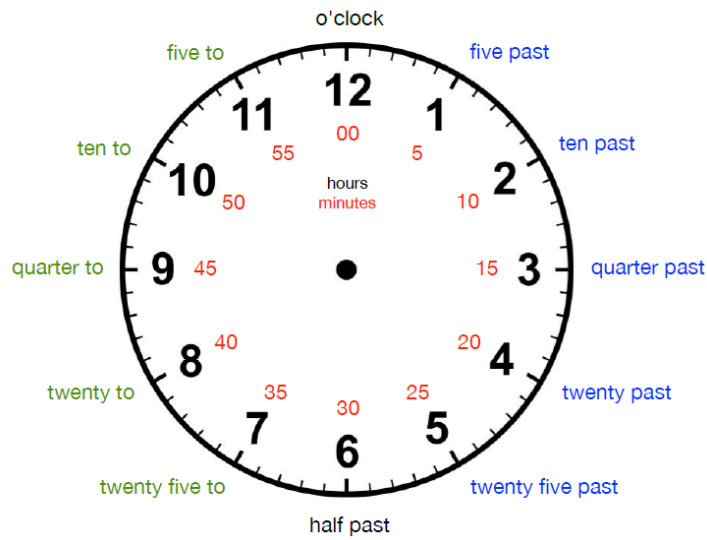


## Wednesday Year 3 /4 Maths – Time

Today we will look at telling the time to the nearest 5 minutes.


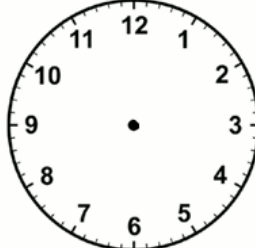
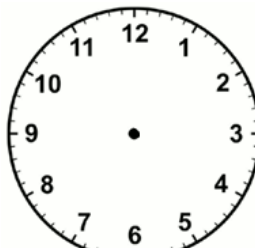
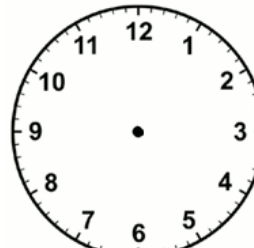


Can you label a clock in your house with some of the times shown on the clock face?

Remember – the short hand is the hour hand; the longer hand is the minute hand.

Use a clock from your own house (ask an adult first), cut out the attached template or use the clock faces below to show these times:

10 past 8	25 past 11	10 minutes to 4	20 minutes to 3
-----------	------------	-----------------	-----------------

What time is it? Count in 5s to see how many minutes there are to the hour.

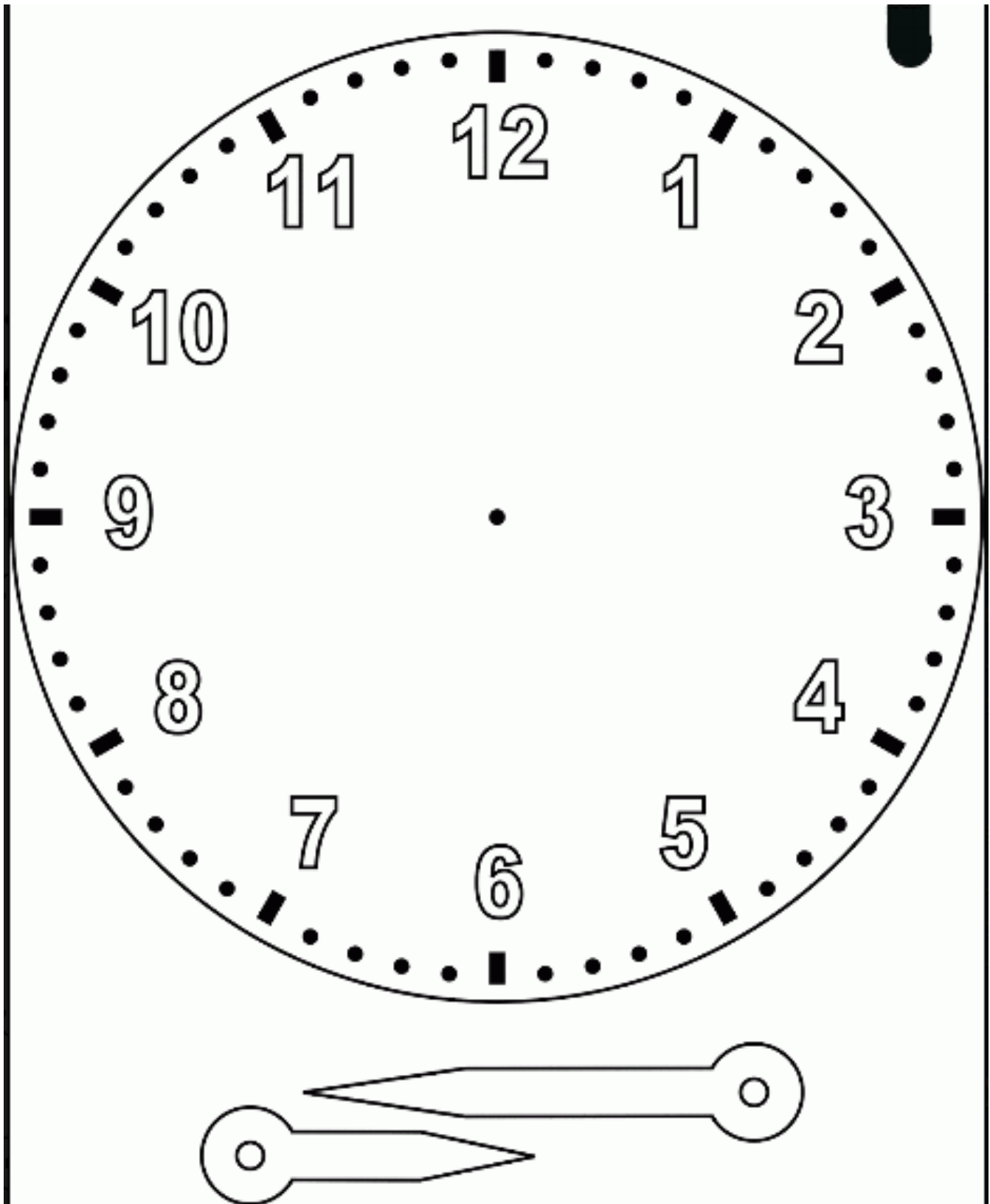




Online resources: If you have time, have a go at these games.

[https://www.sheppardsoftware.com/mathgames/earlymath/on\\_time\\_game1.htm](https://www.sheppardsoftware.com/mathgames/earlymath/on_time_game1.htm)

<https://mathsframe.co.uk/en/resources/resource/116/telling-the-time>



You could use cut out this template and make your own clock.

Challenge questions:

1. I start swimming at 5 o'clock and swim for 2 and a half hours. What time do I finish?
  
2. I go to a party at 4 o'clock. The party lasts for 2 and a quarter hours, what time does it end?
  
3. Our maths lesson starts at 9.15 and lasts for 1 and a half hours. What time does it end?
  
4. A football match starts at 6 o'clock. They play for an hour and three quarters, what time does the game end?
  
5. I go shopping at 12.45. I shop for 2 and a half hours, what time do I finish?
  
6. I finished reading my book at 7 o'clock. I read for half an hour, what time did I start reading?
  
7. Playtime starts at 10 minutes to 10. It lasts for half an hour, what time does it end?
  
8. I got to school at 8 o'clock. My journey took 45 minutes, what time did I leave my house?